


Name: _____

Date: _____

Finding Area of a Rectangle

Directions: Find the area of each shape by counting the square units. Show your work!


Example



To find Area:
Count the number of squares
in each rectangle

Area = 24 square units

1.



A = _____

5.




A = _____

2.




A = _____

6.



A = _____

3.



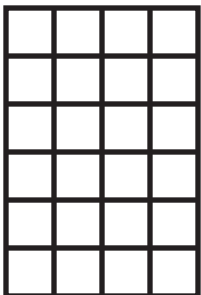
A = _____

7.



A = _____

4.



A = _____

8.



A = _____


Name: _____

Date: _____

Finding Area of a Rectangle

Directions: Find the area of each shape by counting the square units. Show your work!


Example



To find Area:
Count the number of squares
in each rectangle

Area = 24 square units

1.



A = 18 sq. unit _____

5.




A = 3 sq. units _____

2.




A = 7 sq. units _____

6.



A = 32 sq. units _____

3.



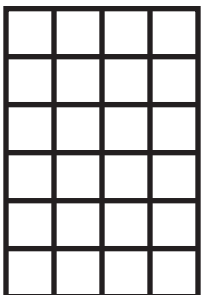
A = 6 sq. units _____

7.



A = 18 sq. units _____

4.



A = 24 sq. units _____

8.



A = 12 sq. units _____