











Name: _____

Date: _____

Geometric Shapes

Directions: Circle the name of the solid that each object looks like











<p>1.</p> 	<p>a. Cube b. Rectangle c. Pyramid d. Sphere e. None</p> <p>2.</p> 
<p>3.</p> 	<p>a. Cube b. Cone c. Pyramid d. Cylinder e. None</p> <p>4.</p> 
<p>5.</p> 	<p>a. Cube b. Rectangle c. Pyramid d. Sphere e. None</p> <p>6.</p> 
<p>7.</p> 	<p>a. Cube b. Cone c. Pyramid d. Cylinder e. None</p> <p>8.</p> 
<p>9.</p> 	<p>a. Cube b. Cone c. Pyramid d. Cylinder e. None</p> <p>10.</p> 

Name: _____

Date: _____

Geometric Shapes

Directions: Circle the name of the solid that each object looks like

1. 	a. Cube b. Rectangle c. Pyramid d. Sphere e. None	3. 	a. Cube b. Cone c. Pyramid d. Cylinder e. None	5. 	a. Cube b. Rectangle c. Pyramid d. Sphere e. None	7. 	a. Cube b. Cone c. Pyramid d. Cylinder e. None	9. 	a. Cube b. Rectangle c. Pyramid d. Sphere e. None	2. 	a. Cube b. Rectangle c. Pyramid d. Sphere e. None	4. 	a. Cube b. Cone c. Pyramid d. Cylinder e. None	6. 	a. Cube b. Rectangle c. Pyramid d. Sphere e. None	8. 	a. Cube b. Cone c. Pyramid d. Cylinder e. None	10. 	a. Cube b. Cone c. Pyramid d. Cylinder e. None
--	--	--	---	--	--	--	---	--	--	---	--	--	---	--	--	---	---	--	---